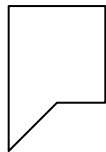




Determine which letter BEST represents the shapes that were used to create the figure shown.

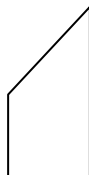
Answers

1)



- A. square & triangle
- B. hexagon & rectangle
- C. rectangle & square
- D. heptagon & hexagon

2)



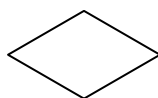
- A. triangle & quadrilateral
- B. octagon & triangle
- C. octagon & rectangle
- D. triangle & hexagon

3)



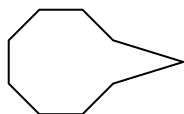
- A. hexagon & octagon
- B. triangle & triangle
- C. square & pentagon
- D. hexagon & quadrilateral

4)



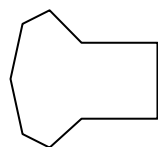
- A. hexagon & triangle
- B. triangle & triangle
- C. square & pentagon
- D. square & heptagon

5)



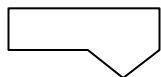
- A. octagon & rectangle
- B. triangle & octagon
- C. rectangle & quadrilateral
- D. quadrilateral & square

6)



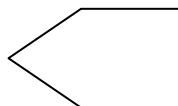
- A. pentagon & quadrilateral
- B. pentagon & triangle
- C. quadrilateral & heptagon
- D. rectangle & square

7)



- A. triangle & octagon
- B. octagon & rectangle
- C. rectangle & triangle
- D. quadrilateral & heptagon

8)



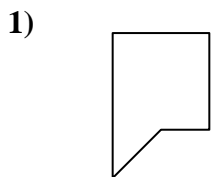
- A. pentagon & triangle
- B. square & triangle
- C. rectangle & octagon
- D. hexagon & quadrilateral

- 1. _____
- 2. _____
- 3. _____
- 4. _____
- 5. _____
- 6. _____
- 7. _____
- 8. _____

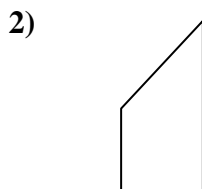


Determine which letter BEST represents the shapes that were used to create the figure shown.

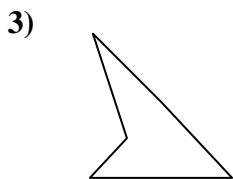
Answers



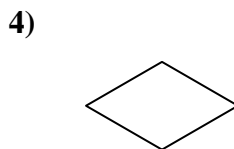
- A. square & triangle
- B. hexagon & rectangle
- C. rectangle & square
- D. heptagon & hexagon



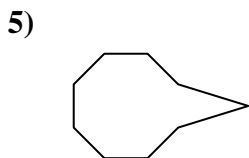
- A. triangle & quadrilateral
- B. octagon & triangle
- C. octagon & rectangle
- D. triangle & hexagon



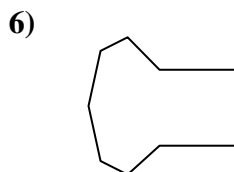
- A. hexagon & octagon
- B. triangle & triangle
- C. square & pentagon
- D. hexagon & quadrilateral



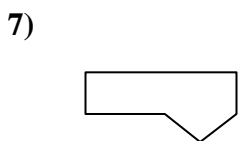
- A. hexagon & triangle
- B. triangle & triangle
- C. square & pentagon
- D. square & heptagon



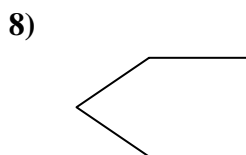
- A. octagon & rectangle
- B. triangle & octagon
- C. rectangle & quadrilateral
- D. quadrilateral & square



- A. pentagon & quadrilateral
- B. pentagon & triangle
- C. quadrilateral & heptagon
- D. rectangle & square



- A. triangle & octagon
- B. octagon & rectangle
- C. rectangle & triangle
- D. quadrilateral & heptagon



- A. pentagon & triangle
- B. square & triangle
- C. rectangle & octagon
- D. hexagon & quadrilateral

- 1. **A**
- 2. **A**
- 3. **B**
- 4. **B**
- 5. **B**
- 6. **C**
- 7. **C**
- 8. **B**